

Name: _____

ROBOX ADDITION

solve and write the sum.

$1 + 2 =$ _____ $1 + 2 =$ _____

$1 + 3 =$ _____ $1 + 3 =$ _____

$1 + 4 =$ _____ $1 + 4 =$ _____

$2 + 1 =$ _____ $2 + 1 =$ _____

$2 + 2 =$ _____ $2 + 2 =$ _____

$3 + 2 =$ _____ $3 + 2 =$ _____

$1 + 2 =$ _____

$1 + 3 =$ _____

$1 + 4 =$ _____

$2 + 1 =$ _____

$2 + 2 =$ _____

$3 + 2 =$ _____

Name: _____

ROBLOX SUBTRACTION

solve and write the difference.

$5 - 1 = \underline{\quad\quad}$ $5 - 1 = \underline{\quad\quad}$

$5 - 3 = \underline{\quad\quad}$ $5 - 3 = \underline{\quad\quad}$

$4 - 2 = \underline{\quad\quad}$ $4 - 2 = \underline{\quad\quad}$

$3 - 1 = \underline{\quad\quad}$ $3 - 1 = \underline{\quad\quad}$

$2 - 2 = \underline{\quad\quad}$ $2 - 2 = \underline{\quad\quad}$

$4 - 3 = \underline{\quad\quad}$ $4 - 3 = \underline{\quad\quad}$

$5 - 1 = \underline{\quad\quad}$

$5 - 3 = \underline{\quad\quad}$

$4 - 2 = \underline{\quad\quad}$

$3 - 1 = \underline{\quad\quad}$

$2 - 2 = \underline{\quad\quad}$

$4 - 3 = \underline{\quad\quad}$

Name: _____

Tracing Number 1-20

Trace the numbers.

1	2	3	4
5	6	7	8
9	10	11	12
13	14	15	16
17	18	19	20

Name: _____

Matching Addition

$2 + 6$

9

$5 + 4$

8

$6 + 7$






6

$3 + 3$

13

MISSING NUMBERS

Fill each heart with the missing numbers from 1 to 20.



Name: _____

Counting 1 to 20

Fill in the missing numbers.

1

3

4

7

10

11

13

14

17

19

20

BALLOON COUNTING

Count the balloons and write the number in the box.

